



**14** tigers are on a hunt, **12** more tigers join them.

How many tigers are there now?



**13** baboons are searching for food, **4** more baboons appear.

How many baboons want to be fed now?



A tree frog is trying to solve the sum **15** take away **10**.

Can you help him?  $15-10$



The animals were at the watering hole, there are **15** animals, **5** animals leave.

How many animals are there now?



**1** snake is asleep in his woodpile house,  
**10** more snakes try to squeeze in.

How many snakes are in there now? Work out the sum.




**13** Parrots are sat in a tree, **5** fly away.

How many are there now?




**20** tigers are on a hunt, **10** more tigers join them.

How many tigers are there now?



**15** baboons are searching for food, **6** more baboons appear.

How many baboons want to be fed now?



A tree frog is trying to solve the sum **20** take away **10**.

Can you help him? 20-10



The animals were at the watering hole, there are **25** animals, **5** animals leave.

How many animals are there now?



**1** snake is asleep in his woodpile house, **20** more snakes try to squeeze in.

How many snakes are in there now? Work out the sum.



**30** Parrots are sat in a tree, **10** fly away.

How many are there now?

