

Counting forwards within 50

Look at the first number. Count forward and fill in the missing numbers.

16

17

18

19

20

22 ○ ○ ○ ○

43 ○ ○ ○ ○

25 ○ ○ ○ ○

14 ○ ○ ○ ○

Counting forwards within 100

Look at the first number. Count forward and fill in the missing numbers.

34 35 36 37 38 39

45

88

37

Counting backwards within 20



Look at the first number.
Count backwards and fill in the missing numbers.








Finding 1 more and 1 less

Count each object, then write 1 more and 1 less in each box.

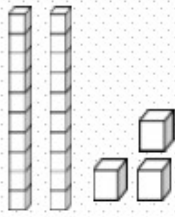
1 less

1 more

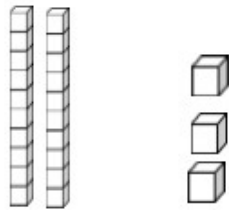
Finding tens and ones

Look at the pictures. Write the number of tens and ones.



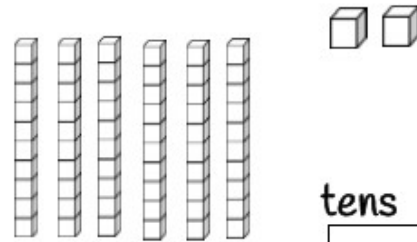
tens ones

2	3
---	---



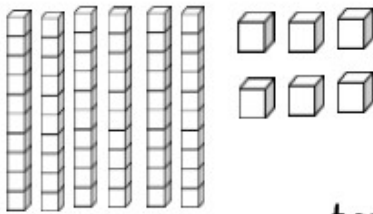
tens ones

--	--



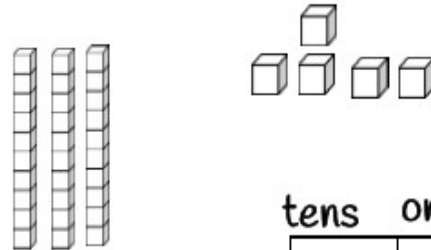
tens ones

--	--



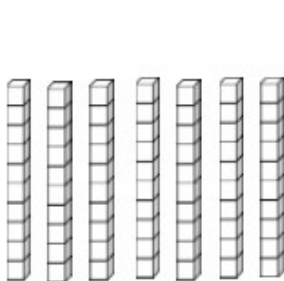
tens ones

--	--



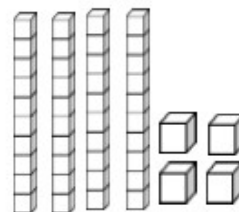
tens ones

--	--



tens ones

--	--



tens ones

--	--