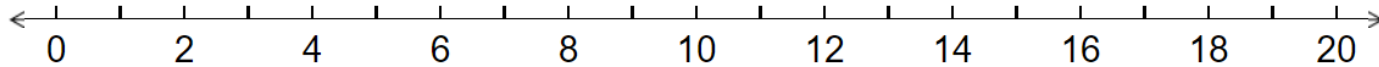
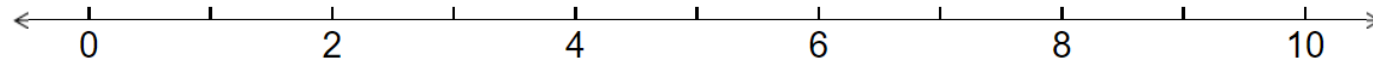

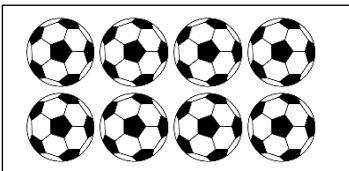



1. Can you fill in the missing numbers on the number lines?




2. Can you count the objects?

	<p>How many ducks?</p> <p>_____</p>
--	-------------------------------------

	<p>How many footballs?</p> <p>_____</p>
---	---

	<p>How many apples?</p> <p>_____</p>
--	--------------------------------------

	<p>How many flowers?</p> <p>_____</p>
--	---------------------------------------

3. Using objects, pictures or the number line,  
can you solve these calculations?

$$3 + 8 = \underline{\quad}$$

$$5 + 4 = \underline{\quad}$$

$$7 + 2 = \underline{\quad}$$

$$9 + 5 = \underline{\quad}$$

$$11 + 6 = \underline{\quad}$$

$$14 + 3 = \underline{\quad}$$

$$16 + 1 = \underline{\quad}$$

$$17 + 3 = \underline{\quad}$$