

























Counting in 5s

Count in 5s and fill in the missing numbers on the hands.

 5			
	 30		 40
		 55	
 65			
		 95	
 105			

LO: Counting in 5s

Complete the following sequences:

- a) 5 10 15 ___ 25 ___ f) ___ 50 45 ___ 35 30
- b) 35 30 ___ 20 ___ 10 g) 35 40 ___ 50 ___ 60
- c) ___ 25 30 35 ___ 45 h) 65 ___ ___ 50 45 40
- d) 45 ___ ___ 30 25 20 i) ___ ___ 35 40 45 50
- e) 15 ___ 25 30 ___ 40 j) 75 70 ___ ___ 55 50

Complete the number square below:

1	2	3	4		6	7	8	9	
11	12	13	14		16	17	18	19	
21	22	23	24		26	27	28	29	
31	32	33	34		36	37	38	39	
41	42	43	44		46	47	48	49	
51	52	53	54		56	57	58	59	
61	62	63	64		66	67	68	69	
71	72	73	74		76	77	78	79	
81	82	83	84		86	87	88	89	
91	92	93	94		96	97	98	99	

Challenge:

When you count in 5's, which numbers are odd and which are even?

What do you notice?

Can you complete the patterns below?

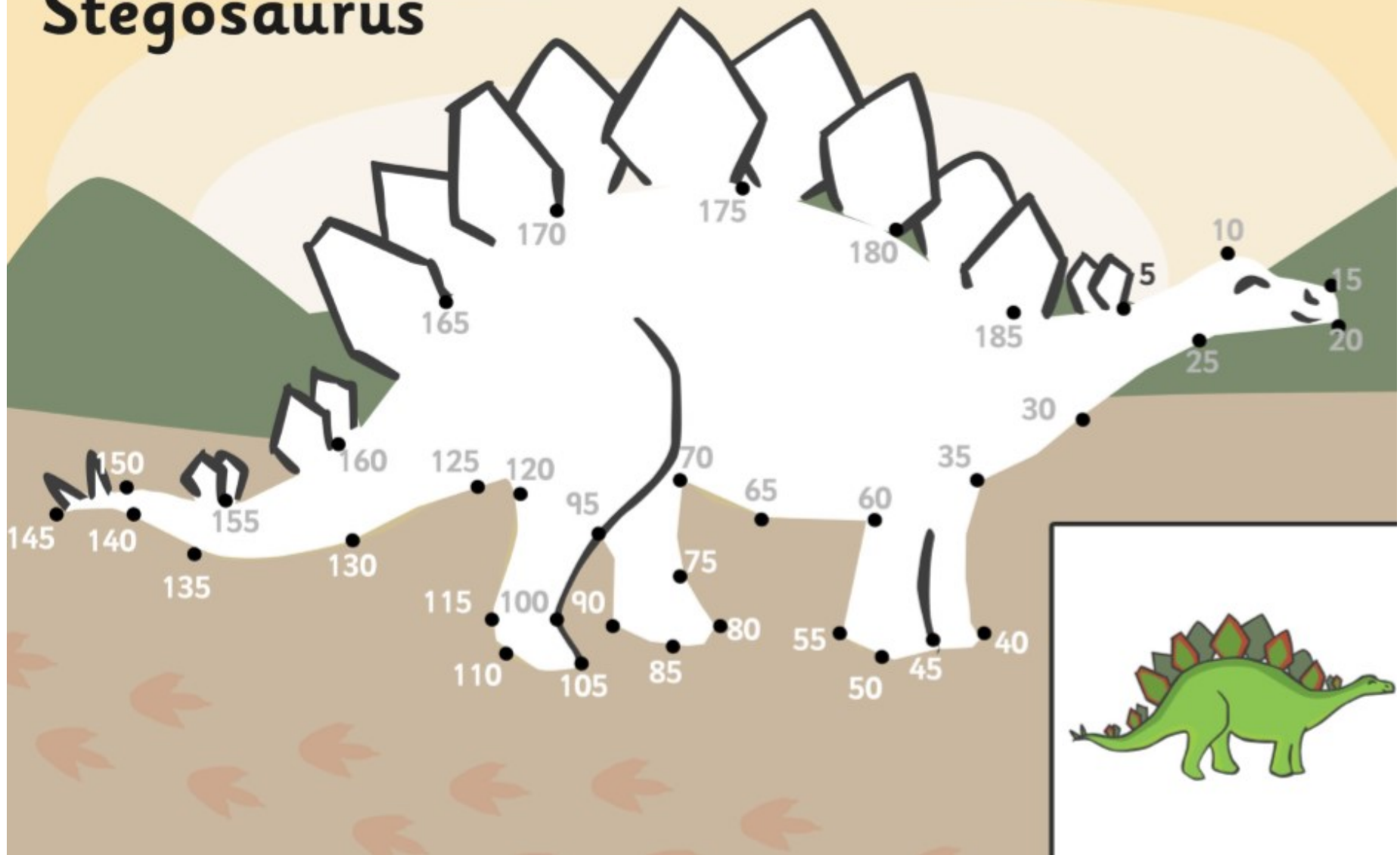
5	10	15							
----------	-----------	-----------	--	--	--	--	--	--	--

35	40	45							
-----------	-----------	-----------	--	--	--	--	--	--	--

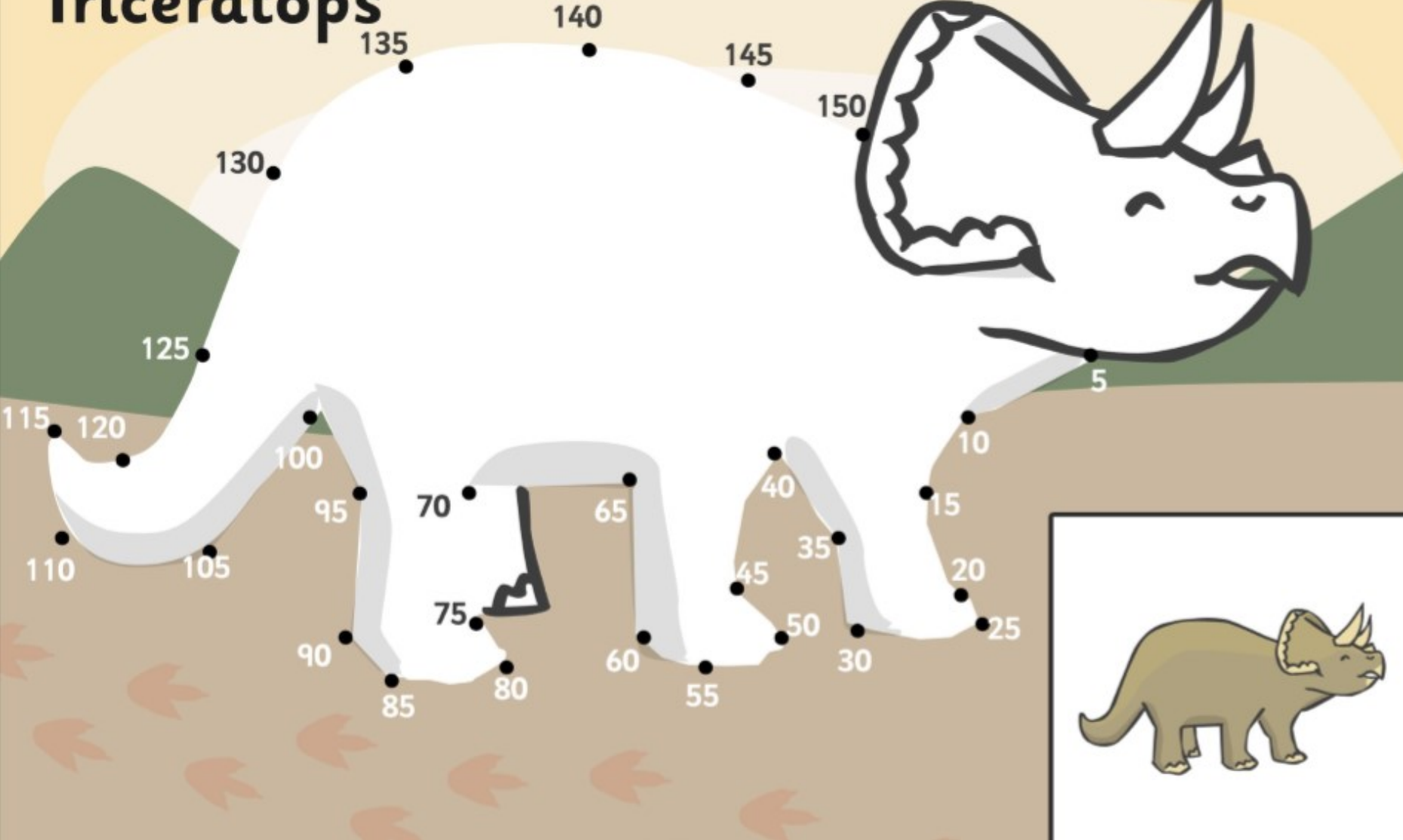
25	30	35	40						
-----------	-----------	-----------	-----------	--	--	--	--	--	--

60	65	70	75	80					
-----------	-----------	-----------	-----------	-----------	--	--	--	--	--

Stegosaurus

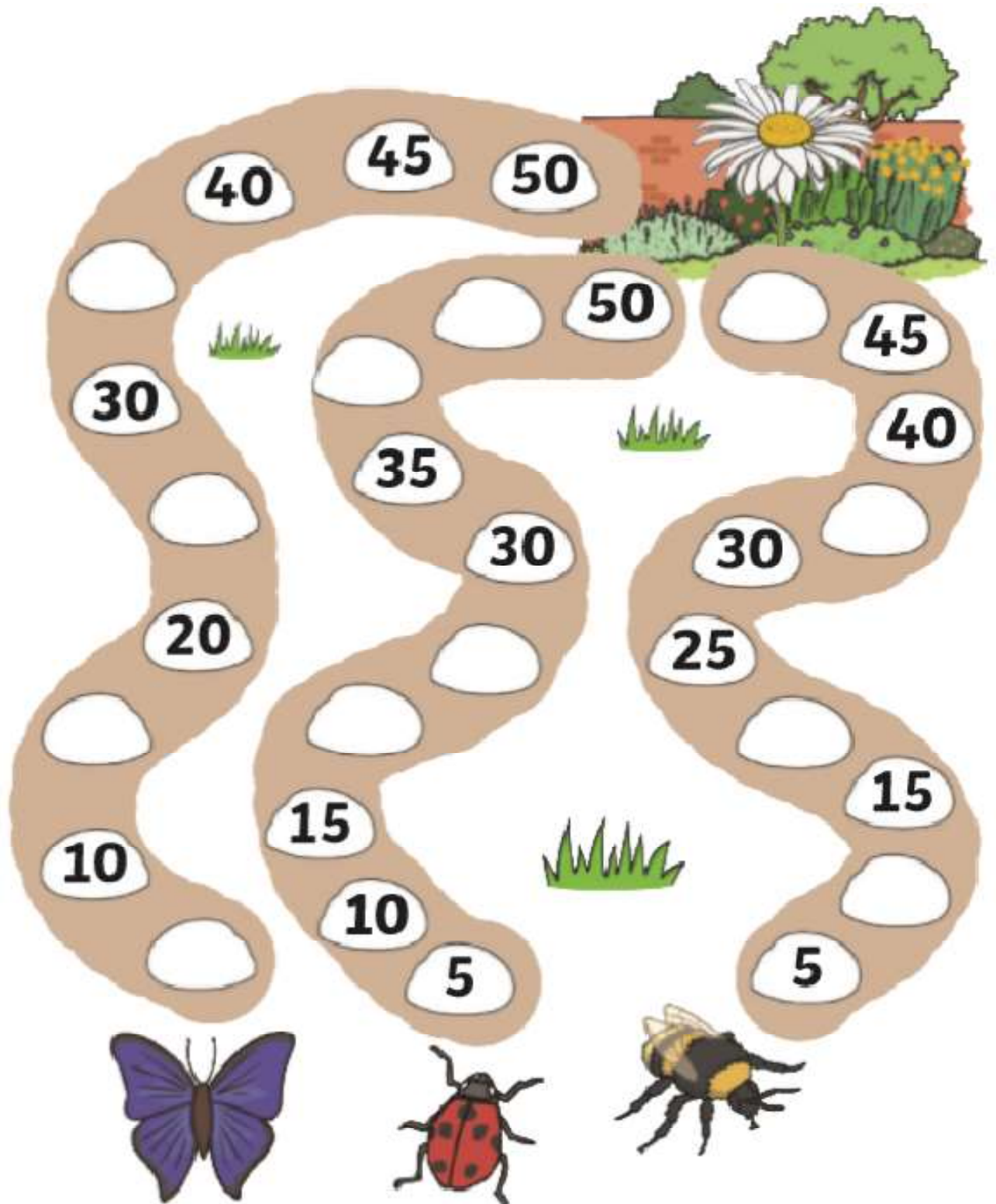


Triceratops



Minibeasts Missing Numbers

Counting in 5s to 50



Minibeasts Missing Numbers

Counting in 5s to 50

