




Use your knowledge of counting in 2's, 5's and 10's to add these coins up. Try counting in 2's, 5's and 10s to find the answer.


How Much Money Is in My Jar?













Make the following totals by drawing the coins in the jar.



10p made with
2p coins



8p made with
2p coins



20p made with
10p coins



15p made with
5p coins



10p made with
5p coins



40p made with
10p coins



6p made with
2p coins



20p made with
5p coins



16p made with
2p coins



18p made with
2p coins



50p made with
10p coins



25p made with
5p coins